

PRACTICE QUESTIONS

- Colonists protest the Stamp Act.
- Sons of Liberty groups are formed.
- Crates of tea are thrown into Boston Harbor.
- Parliament passes Coercive Acts.

① These events helped lead to the

- A) French and Indian War
- B) Revolutionary War
- C) Whiskey Rebellion
- D) War of 1812

② Which heading best completes the partial outline below?

- I. _____
- A. National government unable to levy direct taxes
 - B. No single national currency
 - C. Lack of an elected chief executive

- A) Weaknesses of the Articles of Confederation
- B) Strengths of the Continental Congress
- C) Provisions of the United States Constitution
- D) Influence of Treaties with European Governments

Congress shall make no law respecting an establishment of religion, or prohibiting the free exercise thereof; or abridging the freedom of speech, or of the press; or the right of the people peaceably to assemble, and to petition the Government for a redress of grievances.

—First amendment, United States Constitution

③ What is one impact of this amendment on American society?

- A) Congress cannot mandate a national religion.
- B) Religious groups cannot lobby Congress.
- C) Members of the press cannot hold public office.
- D) The Supreme Court cannot limit free speech during wartime.

... "We hold these truths to be self-evident: that all men and women are created equal: ..."

—Seneca Falls Convention, 1848

④ Which document most influenced the authors of this statement?

- A) Mayflower Compact
- B) Albany Plan of Union
- C) Declaration of Independence
- D) Articles of Confederation



Source: Clifford Berryman, *Washington Star*, August 31, 1930

⑤ This cartoon is portraying a situation that resulted from the

- A) public rejection of the New Deal
- B) economic downturn of the late 1920s
- C) failure of the Civilian Conservation Corps
- D) opposition to the Treaty of Versailles

... I see one-third of a nation ill-housed, ill-clad, ill-nourished.

It is not in despair that I paint you that picture. I paint it for you in hope—because the Nation, seeing and understanding the injustice in it, proposes to paint it out. We are determined to make every American citizen the subject of his country's interest and concern; and we will never regard any faithful, law-abiding group within our borders as superfluous. The test of our progress is not whether we add more to the abundance of those who have much; it is whether we provide enough for those who have too little. ...

—President Franklin D. Roosevelt, Second Inaugural Address, January 20, 1937

⑥ President Franklin D. Roosevelt addressed the situation described in this speech by

- A) reducing the influence of labor unions
- B) supporting programs to aid the poor and unemployed
- C) promoting the interests of big business
- D) adopting the trickle-down economic theory

"Yesterday, December 7, 1941—a date which will live in infamy—the United States of America was suddenly and deliberately attacked by naval and air forces of the Empire of Japan. . . ."

—President Franklin D. Roosevelt, Address to Congress, December 8, 1941

- 7 In this statement, President Roosevelt was addressing Congress about the
- A sinking of merchant ships in the Atlantic Ocean
 - B D-Day invasion of France
 - C bombing of Pearl Harbor
 - D air raids on the Panama Canal




Source: N. C. Wyeth, U.S. Department of the Treasury, 1942



Source: Welmer Pursell, Office of Price Administration, 1943

- 8 These World War II posters encouraged Americans to
- A demand higher wages
 - B enlist in the armed services
 - C purchase new automobiles
 - D support home-front war efforts



Source: Nick Anderson, Louisville Courier-Journal, December 22, 2005

- 9 This cartoon illustrates that actions taken during times of crisis have sometimes led to concerns about the functioning of
- A federalism
 - B salutary neglect
 - C checks and balances
 - D bicameral legislatures

10 Which quotation is correctly paired with the document in which it is found?

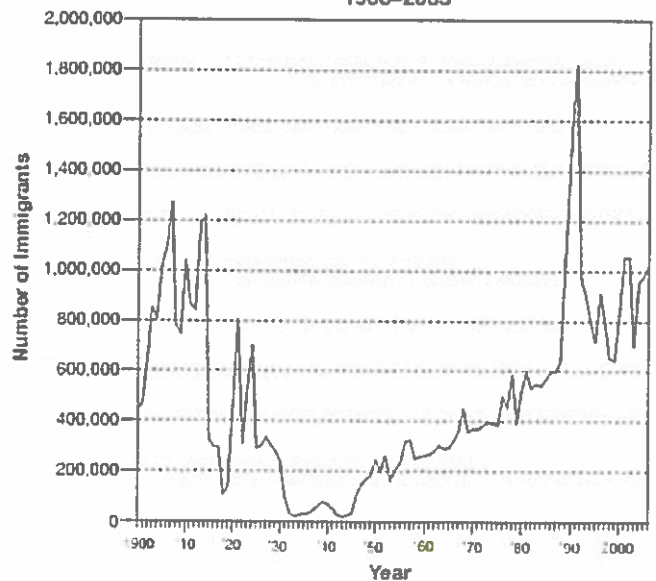
- A "...the right of the people to keep and bear arms, shall not be infringed." — Washington's Farewell Address
- B "We hold these truths to be self-evident, that all men are created equal..." — Monroe Doctrine
- C "Four score and seven years ago our fathers brought forth, upon this continent, a new nation..." — Lincoln's Gettysburg Address
- D "We the people of the United States, in order to form a more perfect union..." — Declaration of Independence

11 Which heading best completes the partial outline below?

- I. _____
- A. House of Burgesses
 - B. Mayflower Compact
 - C. New England town meetings
 - D. Albany Plan of Union

- A Early Colonial Documents
- B Limits on Representative Government
- C Contributions of the Enlightenment
- D Foundations of American Democracy

Legal Immigration to the United States: 1900–2005



Source: U. S. Department of Homeland Security (adapted)

- 12 Which statement is best supported by the information provided in this graph?
- A Each year since 1950, immigration has increased.
 - B Quotas favored immigration from southern and eastern Europe.
 - C Immigration declined during world wars and economic hard times.
 - D Every year since 1920, at least one million people have come to the United States.

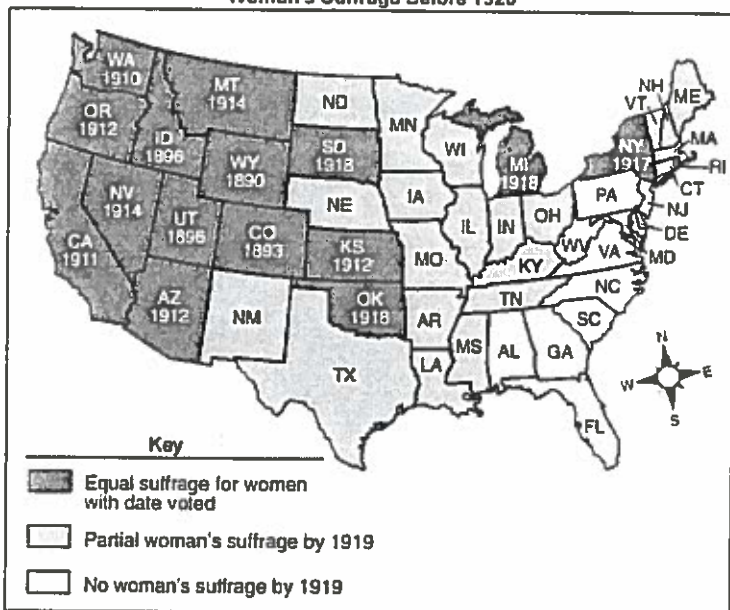
- 13 Which heading best completes the partial outline below?

I. _____

- A. The United States claims the Hawaiian Islands.
- B. Puerto Rico becomes a United States territory.
- C. The United States fights an insurrection in the Philippine Islands.
- D. The United States Senate ratifies the Panama Canal treaty.

- A Rise of American Imperialism
- B Causes of World War I
- C Enforcement of the Monroe Doctrine
- D Trade Expansion in East Asia

Woman's Suffrage Before 1920



Source: Sandra Opatowska, *The Routledge Historical Atlas of Women in America*, Routledge (adapted)

- 14 Based on the map, which region of the United States demonstrated the most support for complete voting rights for women before 1919?

- A New England
- B Midwest
- C South
- D West

15 I. _____

- A. Disputes over tariff rates
- B. Introduction of slavery into the territories
- C. Demands of abolitionists
- D. Disagreements over States rights

- A Reasons for the American System
- B Successes of Third Political Parties
- C Causes of Sectionalism
- D Justifications for Economic Reform



Source: Jacob Riis, *How the Other Half Lives*, 1890

- 16 One reason Jacob Riis published many photographs similar to this was to
- A disprove claims of yellow journalists
 - B encourage government assistance for poor farmers
 - C promote the use of child labor
 - D increase public concern over tenement conditions

...I pledge you, I pledge myself, to a new deal for the American people. Let us all here assembled constitute ourselves prophets of a new order of competence and of courage. This is more than a political campaign; it is a call to arms. Give me your help, not to win votes alone, but to win in this crusade to restore America to its own people.

—Franklin D. Roosevelt, Acceptance Speech, Democratic National Convention, 1932

- 17 In this statement, Franklin D. Roosevelt promised to
- A build up the military
 - B reduce government interference in business
 - C end an isolationist foreign policy
 - D provide government assistance to combat the Great Depression

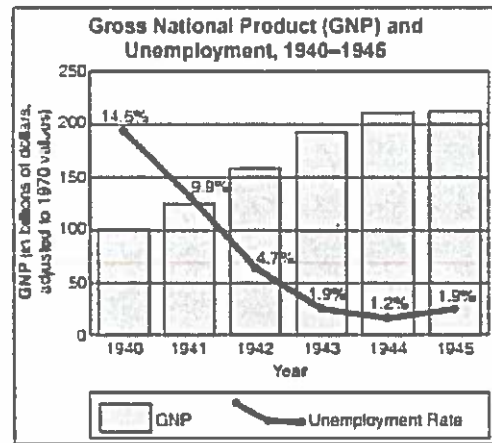
...It is hereby declared to be the policy of the President that there shall be equality of treatment and opportunity for all persons in the armed services without regard to race, color, religion or national origin. This policy shall be put into effect as rapidly as possible, having due regard to the time required to effectuate [implement] any necessary changes without impairing efficiency or morale....

— Section 1, Executive Order 9981

- 18 The purpose of Executive Order 9981, issued by President Harry Truman, was to
- A encourage women to join the armed services
 - B end racial segregation in the military
 - C ensure adequate manpower to fight the Korean War
 - D establish war crimes tribunals in Western Europe



Source: Detroit News, 1930 (adapted)



Source: Historical Statistics of the United States, U.S. Bureau of the Census

- 21) Which conclusion about the United States economy during World War II is most clearly supported by the information in the graph?
- A Organized labor conducted frequent strikes during the war years.
 - B The war led to improved economic conditions.
 - C The Gross National Product (GNP) steadily declined during the war years.
 - D Unemployment increased throughout the war.

The Spirit of '37



Source: Fred O. Seibel, Richmond Times Dispatch, January 8, 1937

- 19) Which New Deal agency was created to provide employment for individuals such as the man in the photograph?
- A Agricultural Adjustment Administration (AAA)
 - B Social Security Administration (SSA)
 - C Works Progress Administration (WPA)
 - D Federal Deposit Insurance Corporation (FDIC)
- "Greece Receives U.S. Aid to Fight Communists"
 "U.S. Military Airlifts Supplies to Berlin"
 "U.S. Troops Sent to Defend South Vietnam"
- 20) These headlines best illustrate the United States commitment to a policy of
- A détente
 - B isolationism
 - C containment
 - D imperialism

- 22) What is the main idea of this cartoon?
- A President Franklin D. Roosevelt wanted to end Supreme Court opposition to the New Deal.
 - B Congress refused to pass New Deal legislation.
 - C President Franklin D. Roosevelt had not faced any opposition to his New Deal.
 - D Congress voted to increase the size of the Supreme Court.

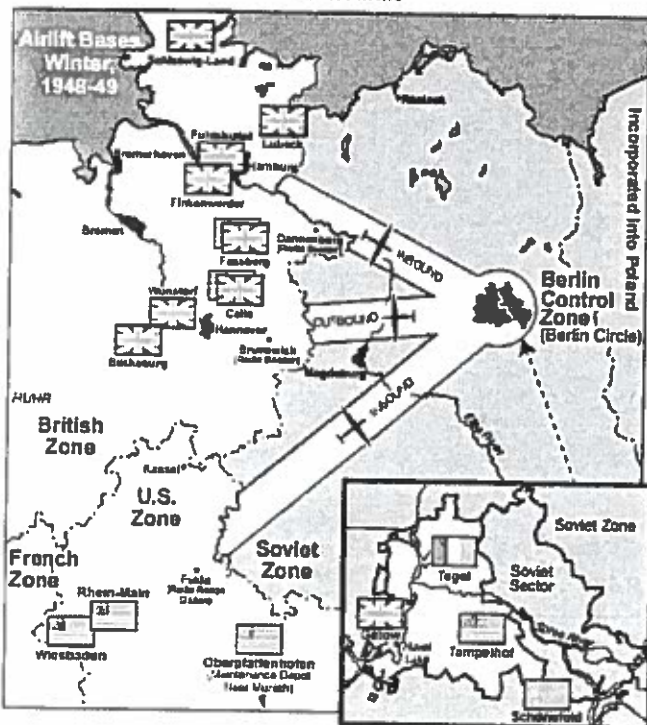
Members of the Mochida family await an evacuation bus in Hayward, California, May 8, 1942.



Source: U.S. National Archives & Records Administration

- 23 This photograph taken during World War II shows the
- A) deportation of Japanese Americans to Japan
 - B) arrival of new Japanese immigrants in California
 - C) migration of Japanese American families to the East Coast
 - D) relocation of Japanese Americans to internment camps

Berlin Airlift



Source: Giangreco and Griffin, *Airbridge to Berlin*, Presidio Press (adapted)

- 24 The situation shown on the map was primarily the result of the
- A) continuing disagreement among wartime Allies about Germany's future
 - B) demand of Great Britain and France that Germany pay harsh reparations
 - C) desire to conduct war crimes trials for Nazi leaders
 - D) need to bring a unified Germany into the United Nations

"No voting qualification or prerequisite to voting, or standard, practice, or procedure shall be imposed or applied by any State or political subdivision to deny or abridge the right of any citizen of the United States to vote on account of race or color."

— Section 2, Voting Rights Act of 1965


- 25 The specific goal stated in this section of the Voting Rights Act of 1965 was to
- A) expand the use of property qualifications
 - B) establish voter qualifications such as literacy tests
 - C) stop fraudulent voting in large cities
 - D) remove barriers to voting based on racial background

"...We may anticipate a state of affairs in which two Great Powers will each be in a position to put an end to the civilization and life of the other, though not without risking its own. We may be likened to two scorpions in a bottle, each capable of killing the other, but only at the risk of his own life...."

— J. Robert Oppenheimer, 1953

- 26 In this statement, J. Robert Oppenheimer was referring to the
- A) benefits of neutrality
 - B) dangers of the nuclear arms race
 - C) failures of appeasement
 - D) positive effects of atomic energy

HOT PURSUIT



Source: Pat Cliphant, *Denver Post*, December 29, 1967 (adapted)

- 27 What is the main idea of this 1967 cartoon?
- A) Desertion by United States soldiers was widespread.
 - B) The domino theory no longer applied to Southeast Asia.
 - C) The United States policy of expanding the war in Indochina would be filled with hazards.
 - D) A bridge into Laos and Cambodia helped United States soldiers invade Asia.

Speaker A: United States expansion should not end when we reach the Pacific Coast.

Speaker B: The navy of the United States needs to increase in size to defend our overseas interests.

Speaker C: The United States must serve as the military protector of the Western Hemisphere.

Speaker D: The United States needs to avoid international commitments in order to protect our national interests.

28) Which speaker's statement best expresses the reason that many United States senators rejected the Treaty of Versailles after World War I?

- A) A
B) B
C) C
D) D

...Small islands not capable of protecting themselves, are the proper objects for kingdoms to take under their care; but there is something very absurd, in supposing a continent to be perpetually governed by an island. In no instance hath nature made the satellite larger than its primary planet, and as England and America, with respect to each other, reverses the common order of nature, it is evident that they belong to different systems: England to Europe, America to itself...

— Thomas Paine, *Common Sense*

29) The argument presented in this passage was intended to

- A) urge colonists to accept the Albany Plan of Union
B) provide a reason for ratification of the Constitution of the United States
C) convince American colonists to declare their independence
D) persuade France to aid the United States in the Revolutionary War

...the policy of the government of the United States is to seek a solution which may bring about permanent safety and peace to China, preserve Chinese territorial and administrative entity, protect all rights guaranteed to friendly powers by treaty and international law, and safeguard for the world the principle of equal and impartial trade with all parts of the Chinese Empire...

— Secretary of State John Hay, Circular Letter, July 3, 1900

30) This excerpt from John Hay's Circular Letter became part of the

- A) Open Door policy
B) Roosevelt Corollary to the Monroe Doctrine
C) policy of Dollar Diplomacy
D) Kellogg-Briand Pact

Each state retains its sovereignty, freedom and independence, and every power, jurisdiction and right, which is not by this confederation expressly delegated to the United States, in Congress assembled.

— Article II, Articles of Confederation

The powers not delegated to the United States by the Constitution, nor prohibited by it to the states, are reserved to the states respectively, or to the people.

— 10th amendment, United States Constitution

31) The purpose of each of these provisions is to

- A) determine the division of power between state and central governments
B) create a process for allowing amendments
C) grant the central government power to control the states
D) limit the power of the executive branch

...No political truth is certainly of greater intrinsic [essential] value, or is stamped with the authority of more enlightened patrons of liberty, than that on which the objection is founded. The accumulation of all powers, legislative, executive, and judiciary, in the same hands, whether of one, a few, or many, and whether hereditary, self-appointed, or elective, may justly be pronounced the very definition of tyranny...

— James Madison, *The Federalist*, Number 47

32) Which constitutional principle was established to protect American citizens from the tyranny suggested in this quotation?

- A) due process of law
B) States rights
C) popular sovereignty
D) separation of powers

- Alger Hiss conviction
- Rosenberg trial
- McCarthy hearings

33) These post-World War II events are most closely associated with the fear of

- A) an increase in immigration from the Soviet Union
B) labor conflicts in United States cities
C) an expansion of communism into Cuba
D) a communist threat inside the United States

34

- I. _____
- A. *Heart of Atlanta Motel v. United States* (1964)
 - B. Voting Rights Act of 1965
 - C. Fair Housing Act of 1968

- A) Latino Women Gain Equal Pay
- B) Civil Rights Movement Achieves Victories**
- C) Native American Indians Regain Land Rights
- D) Persons With Disabilities Win Educational Opportunities

35

"Congress Passes Alien and Sedition Acts"
 "Lincoln Suspends Writ of Habeas Corpus"
 "Roosevelt Authorizes Internment of Japanese Americans on West Coast"

Which conclusion is best supported by these headlines?

- A Immigrants are a danger to the welfare of the United States.
- B Perceived threats to national security sometimes result in limits on civil liberties.**
- C Foreign policy is greatly affected by domestic conflicts.
- D The power of the federal government is weakened by risks to national security.

36

Eastern United States



Which shaded area on the map was *least* industrialized in the second half of the 1800s?

- A area A
- B area B
- C area C
- D area D**

37

HARLEM

What happens to a dream deferred?

Does it dry up
 like a raisin in the sun?
 Or fester like a sore—
 And then run?
 Does it stink like rotten meat?
 Or crust and sugar over—
 like a syrupy sweet?

 Maybe it just sags
 like a heavy load.

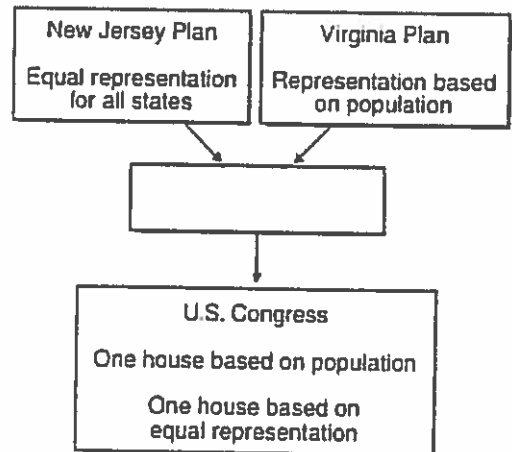
Or does it explode?

— Langston Hughes, 1951 (adapted)

The "dream deferred" in this poem refers to the hopes African Americans had for

- A) social and political equality**
- B) an independent African American nation
- C) access to affordable medical treatment
- D) separate public accommodations

38



Which of the following belongs in the empty box above?

- A The Missouri Compromise
- B The Great Compromise**
- C *The Federalist* papers
- D The Articles of Confederation

Reconstruction comes to an end in the South.



White government officials regain power in the South.



Southern states begin to implement poll taxes, literacy tests, and grandfather clauses.

39

During the late 19th century, the above sequence of events resulted in the

- A disfranchisement of most African Americans in the South.
- B movement to repeal the 14th Amendment to the Constitution.
- C strengthening of the Republican Party in the South.
- D expansion of free public education to all children.

The Espionage Act of 1918 included punishments for speaking or writing "disloyal, scurrilous or abusive language about the American form of government, the Constitution, the armed forces, or the flag. . . ."

—The Espionage Act of 1918

40

The passage and the enforcement of the Espionage Act by the Wilson Administration reflected the belief that the

- A Fourteenth Amendment permitted suspending the Bill of Rights in wartime.
- B nation's war effort would be threatened if dissenters were allowed free speech.
- C public should be shielded from hearing about the reality of the war.
- D other countries at war had already curtailed civil liberties.

President Wilson proposes the Fourteen Points at Paris Peace Conference in 1919.

Thirty-nine U.S. Senators sign petition against U.S. entry into the League of Nations.



41

Which action belongs in the empty box above as it relates to World War I?

- A The U.S. Senate approves a military alliance with Great Britain.
- B The U.S. Senate refuses to ratify the Treaty of Versailles.
- C The U.S. Senate fails to pass the Selective Service Act.
- D The U.S. Senate authorizes the use of troops in Europe.

Louisiana Purchase



42

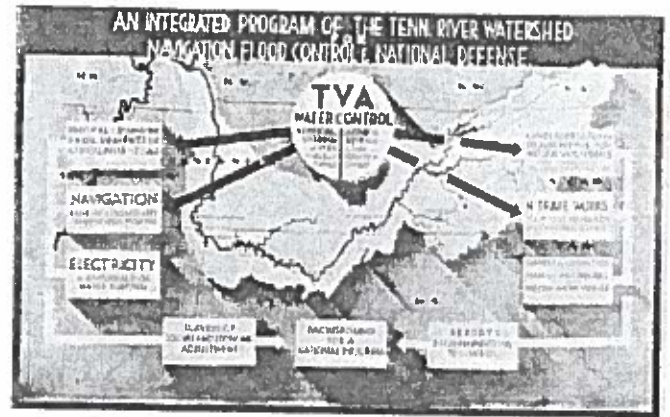
Which president was responsible for the territorial acquisition indicated by the darker shaded area on the map above?

- A George Washington
- B John Adams
- C Thomas Jefferson
- D James Madison

With malice toward none; with charity for all; with firmness in the right, as God gives us to see the right, let us strive on to finish the work we are in; to bind up the nation's wounds; to care for him who shall have borne the battle, and for his widow and orphan, to do all which may achieve and cherish a just and lasting peace among ourselves, and with all nations.

43 This ending to Lincoln's Second Inaugural Speech indicates that his vision for the future after the Civil War was for

- A peacemaking and rebuilding the Union.
- B resolving differences through armed action.
- C providing pensions to Confederate veterans.
- D punishing the South for its actions during the war.



44 Why did the federal government create this program in 1933?

- A To establish industrial centers in the region
- B To promote organic farming practices
- C To offset the effects of urbanization and rapid population growth
- D To provide jobs and improve the regional standard of living

The participants in this week's antidraft demonstration . . . are . . . students or young men . . . who are working within a coalition . . . which calls itself the Stop the Draft Week Committee. . . .

—Douglas Robinson, New York Times, December 6, 1967

44 The demonstration described in this article was most likely prompted by —

- A renewed diplomatic relations with communist China
- B escalated deployment of military forces to Vietnam
- C the signing of the Strategic Arms Limitation Treaty
- D the formation of the North Atlantic Treaty Organization

For the purpose of enabling each State to furnish financial assistance, as far as practicable under the conditions in such State, to aged needy individuals, there is hereby authorized to be appropriated . . . for each fiscal year a sum sufficient to carry out the purposes of this title.

—Social Security Act of 1935, Title I, Section 1

45 Which government poster is directly related to the Civil Rights Act of 1964?

46 How did the legislation excerpted above affect the relationship between the U.S. government and its citizens?

- A It allowed the government to tax investment income.
- B It allowed people to have more direct input in government decisions.
- C It made most people distrust the power of the government.
- D It made the government more responsible for the people's economic welfare.



Source: Environmental Protection Agency



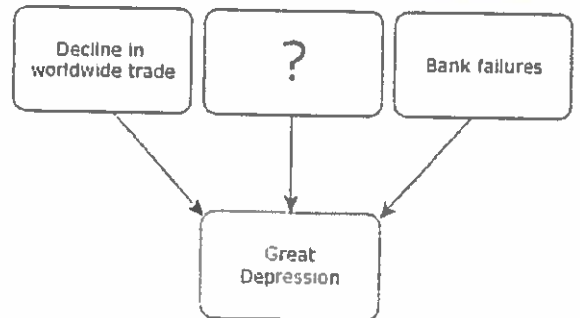
Source: EEOC



Source: U.S. Department of Transportation



Source: DOT



48 Which of the following best completes this graphic organizer?

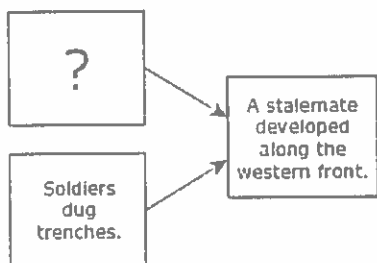
- A Increase in consumer spending
- B Overspeculation in the stock market
- C Decrease in military spending
- D Government subsidization of agriculture

- Statement 1: The U.S. oil industry boomed due to oil deposits found in conquered territories.
- Statement 2: Rebuilding its devastated army cost the United States an enormous amount of money.
- Statement 3: The acquisition of new territories allowed for the expansion of U.S. commercial trade.
- Statement 4: Territorial losses forced the United States to purchase expensive natural resources from other countries.

41 Which statement would most likely be found in a history of the economic impact of the Spanish-American War on the United States?

- A Statement 1
 B Statement 2
 C Statement 3
 D Statement 4

Warfare During the First World War



50 Which action completes this diagram?

- A Submarines attacked unarmed ships.
 B Armored tanks crossed fortified lines.
 C The use of machine guns resulted in massive casualties.
 D Airplanes conducted reconnaissance missions.

Political Views of ?

Supported	Opposed
• Civil disobedience	• Expressions of violence
• Nonviolent resistance	• Political compromises
• Desegregation	• Racial separatism

51 The name of which civil rights leader best completes the title of the graphic?

- A Booker T. Washington
 B Martin Luther King, Jr.
 C Stokely Carmichael
 D Malcolm X

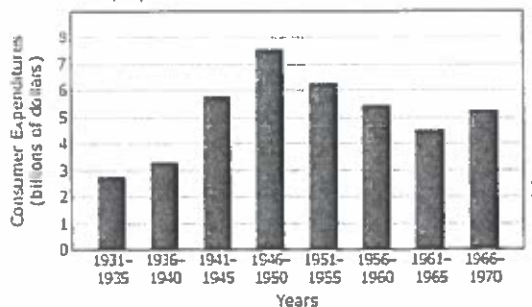


THEY WOULD CLOSE TO THE NEW-COMER THE BRIDGE THAT CARRIED THEM AND THEIR FATHERS OVER

52 Which group of people most likely inspired the creation of this 1893 cartoon?

- A Union leaders
 B Philanthropists
 C Political bosses
 D Nativists

Money Spent at Motion Picture Theaters, 1931-1970



53 Which of these best explains the change in money spent at the movies from 1946 to 1965?

- A An increase in unemployment
 B The popularity of television
 C A decrease in urban population
 D The resurgence of fundamentalism

In these days, it is doubtful that any child may reasonably be expected to succeed in life if he is denied the opportunity of an education. Such an opportunity, where the state has undertaken to provide it, is a right which must be made available to all on equal terms.

—Chief Justice Earl Warren, 1954

54 Which action occurred as a result of the Supreme Court decision excerpted above?

- A The requirement of equal access to school facilities for disabled students
 B The expansion of science in school curricula
 C The implementation of requirements for federal certification of private-school teachers
 D The desegregation of public schools

58 Which quotation could most likely be attributed to Sandra Day O'Connor?

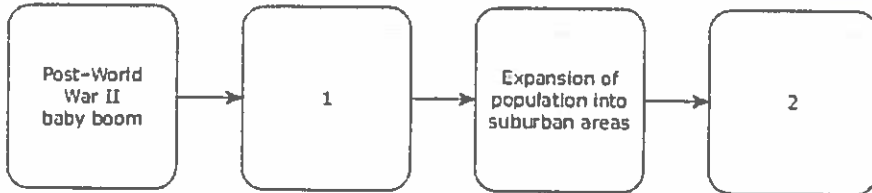
- A "The power I exert on the Court depends on the power of my arguments, not on my gender."
- B "Yes, I did feel a special responsibility to be the first American woman in space."
- C "I came to Washington to work for God, FDR, and the millions of forgotten, plain common workingmen."
- D "I only knew that, as I was being arrested, that it was the very last time I would ever ride in humiliation of this kind."

59

Speaker 1: A continuing proliferation of weapons will result in global war.
 Speaker 2: Conventional arms are more important than advanced technology.
 Speaker 3: The military draft is essential for combat preparedness.
 Speaker 4: Increased defensive strength will discourage aggression by others.

Which speaker would most likely agree with President Ronald Reagan's national security policies?

- A Speaker 1
- B Speaker 2
- C Speaker 3
- D Speaker 4



59 Which numbered pair of phrases best completes this diagram?

- A (1) Increased urban decay; (2) Increased leisure time
- B (1) Increased demand for housing; (2) Increased deforestation
- C (1) Increased demand for automobiles; (2) Increased labor union membership
- D (1) Increased immigration; (2) Increased racial tension

Although the women of America are one step nearer to nylon stockings as a result of new ceiling price schedules . . . , the prospect of "nylons for Christmas," except for a favored few, is not good, hosiery manufacturers said yesterday.

—"Outlook Is Gloomy for Christmas Nylons," New York Times, November 10, 1945

60

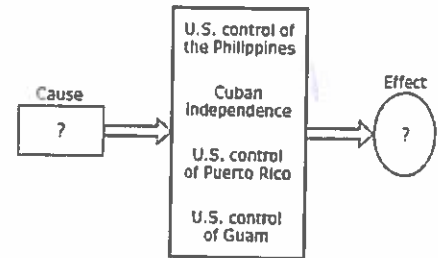
This excerpt suggests that U.S. consumers were affected by —

- A labor union disputes during the Great Depression
- B continued supply shortages after World War II
- C the adoption of worldwide tariffs after World War II
- D the closure of textile plants during the Great Depression



61 What was the main result of the events referred to in these headlines?

- A The growth of insurance and welfare programs for elderly citizens
- B The growth of radical political parties on the East Coast
- C The expansion of political and economic opportunities for minority citizens
- D The expansion of economic cooperation between northern and southern states



61

Which sentence provides information needed to complete both the cause and effect portion of this diagram?

- A The 1898 Spanish-American War led to world power status for the United States.
- B The 1914 opening of the Panama Canal encouraged international trade.
- C The 1919 Treaty of Versailles contributed to the start of World War II in Europe.
- D The 1929 stock-market crash set off the Great Depression in the United States.

The 1943 Hollywood movie *Song of Russia* was produced with the encouragement of the Office of War Information (OWI). At the time the movie was made, the United States and the Soviet Union were allies in the fight against Nazi Germany. The movie tells the story of an American conductor who falls in love with a Russian pianist just before World War II. Together they spend time in an idealized version of the Soviet Union. When the Nazis invade, they join Soviet villagers in the resistance.

62 Which group later investigated the political ideology and actions of many people associated with this film?

- A The Senate Committee on Foreign Relations
- B The Bureau of Citizenship and Immigration Services
- C The House Un-American Activities Committee
- D The Motion Picture Association of America

English Word	Navajo Word	Meaning
Dive-bomber	Gini	Chicken hawk
Fighter plane	Da-he-tah-hi	Hummingbird
Bomber	Jay-sho	Buzzard
America	Ne-he-Mah	Our Mother
Germany	Besh-be-cha-he	Iron hat
Philippines	Ke-yah-da-na-lhe	Floating land

22 How were the Navajo words in this table used during World War II?

- A As propaganda to improve morale among Allied soldiers
- B As a secret code for communicating battle plans between Allied units**
- C As signal words for Allied spies posing as civilians
- D As a language of diplomacy for exchanges with enemy forces

There is hereby created (an agency) . . . , which purpose is to conserve the scenery and the natural and historic objects and the wild life therein and to provide for the enjoyment of the same in such manner and by such means as will leave them unimpaired for the enjoyment of future generations.

—Mission statement for the _____, 1916

23 Which agency name belongs on the blank line?

- A U.S. Geological Survey
- B National Park Service**
- C Bureau of Reclamation
- D U.S. Border Patrol

The National Foundation for Infantile Paralysis, later renamed the March of Dimes, was established in 1938 and . . . was a grassroots campaign run primarily by volunteers. Over the years, millions of people gave small amounts of money to support both the care of people who got _____ 1 and research into prevention and treatment. Those contributions financed Jonas Salk, Albert Sabin, and the other researchers who developed the . . . _____ 2 that children around the world receive today.

—“March of Dimes,” National Museum of American History, www.americanhistory.si.edu/ (accessed July 19, 2012)

24 Which words correctly complete this excerpt?

- A 1: chicken pox, 2: antibiotics
- B 1: tuberculosis, 2: iron lung treatment
- C 1: polio, 2: vaccines**
- D 1: whooping cough, 2: serum

We are on a mission to make sure that freedom is enduring. We're on a mission to say to the rest of the world, come with us—come with us, stand by our side to defeat the evil-doers who would like to rid the world of freedom as we know it.

—President George W. Bush, September 26, 2001

25 How did President Bush attempt to complete the mission described above?

- A By overthrowing a dictator in North Korea
- B By fighting a global war on terrorism**
- C By offering assistance to refugees escaping genocide
- D By supporting the Arab Spring movement

As of January 1, 2008, all tariffs and quotas were eliminated on U.S. exports to Mexico and Canada under the _____ ? The dismantling of trade barriers and the opening of markets has led to economic growth and rising prosperity in all three countries.

—U.S. Department of Commerce, www.export.gov (accessed May 17, 2012)

26 Which of the following correctly completes this description?

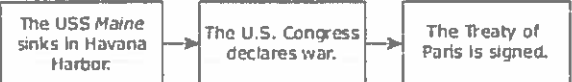
- A North American Free Trade Agreement**
- B Organization of Petroleum Exporting Countries
- C General Agreement on Tariffs and Trade
- D North Atlantic Treaty Organization

Puerto Rico

- _____ ?
- Residents granted U.S. citizenship in 1917
- Governors have been elected by popular vote since 1948
- Adopted both a constitution and commonwealth status in 1952

24 Which of the following best replaces the question mark in this list of information about Puerto Rico?

- A Became a U.S. state during the Reconstruction era
- B Was ceded to the United States as a result of the Spanish-American War**
- C Signed an annexation treaty with the United States after World War I
- D Was promised U.S. military protection as part of Woodrow Wilson's Fourteen Points



25 How did these events affect the United States?

- A They increased public support for cuts in U.S. defense spending.
- B They prompted the end of Dollar Diplomacy in Latin America.
- C They set a precedent of including territorial acquisitions in settlements.
- D They helped establish the United States as an imperial power similar to European nations.**



69 Who was most instrumental in the event described in this headline?

- A Rosa Parks
- B Ella Baker
- C Thurgood Marshall**
- D Medgar Evers

After winning the right to participate in the American experiment of self-government, African Americans were systematically and ruthlessly excluded from it: From 1901 to 1929, there were no blacks in the federal legislature.

—“Black Americans in Congress: An Introduction.” *Historical Essays on the Black Americans in Congress*, www.baic.house.gov (accessed March 29, 2011)

70 How did W. E. B. Du Bois combat prejudice like that described in the excerpt?

- A He demanded the passage of women's suffrage.
- B He established an early civil rights group.**
- C He advocated making political compromises with segregationists.
- D He sought court orders to protect the rights of voters.

71 Which quotation from President Harry S. Truman offers a reason for U.S. involvement in the conflict between North Korea and South Korea?

- A “The United Nations cannot . . . fulfill adequately its own responsibilities until the peace settlements have been made. . . .”
- B “Above all else, we want to keep the United States prosperous and strong because we know that our prosperity is the best guarantee of peace.”
- C “Communism has passed beyond the use of subversion . . . and will now use armed invasion and war.”**
- D “As a result of these tragic conditions, a militant minority, exploiting human want and misery . . . has made economic recovery impossible.”

?

- The rise of militarism upset the balance of power in Europe.
- Political interference in the unstable Balkan Peninsula increased tensions throughout Europe.
- Germany, Austria-Hungary, and the Ottoman Empire aligned against France, Russia, and Great Britain.

72 Which of the following is the best title for this list?

- A Issues Contributing to the Outbreak of World War I**
- B Principal Reasons for U.S. Entry into World War II
- C Consequences of Twentieth-Century European Isolationism
- D Economic Rivalries Between Cold War Superpowers

An angry mob of over 1,000 whites gathers in front of Central High School, while nine African American students are escorted inside. The Little Rock police remove the nine children for their safety.

—Little Rock Central High School National Historic Site, National Park Service, www.nps.gov (accessed December 2, 2013)

73 This confrontation centered around —

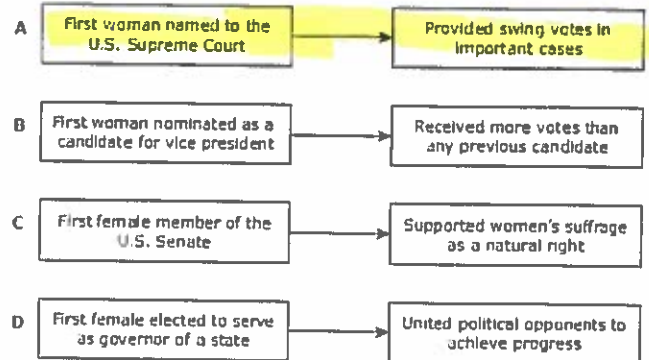
- A disagreement over the use of taxes to fund public education
- B the refusal of federal courts to hear cases concerning civil rights violations
- C the denial of First and Fifth Amendment freedoms by southern state legislatures
- D resistance by state and local governments to the *Brown v. Board of Education* ruling**

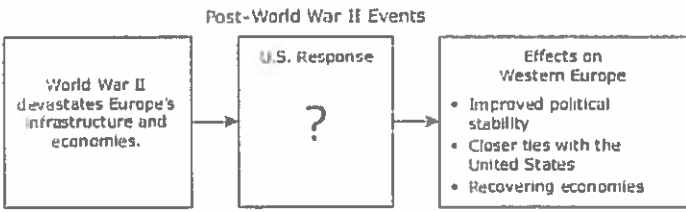


74 The event described in this headline resulted in —

- A decreased federal funding of student loans
- B increased support for the antiwar movement**
- C the reinstatement of the draft
- D an end to federal investigations of student organizations

75 Which diagram is about Sandra Day O'Connor?



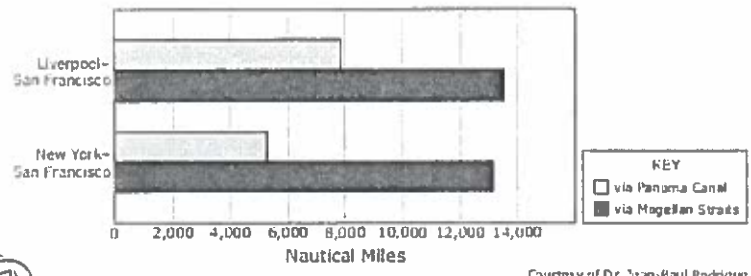


- Which sentence best completes this diagram?
- A The president authorizes a military strike against forces threatening the borders of Western Europe.
 - B Congress appropriates funding for nuclear arms facilities in Western Europe.
 - C The president signs a treaty requiring reparations to be paid to Western European countries.
 - D Congress passes a bill to provide financial assistance to Western European countries.**

In 1954, the Geneva Conference, which was held to negotiate peace in Indochina, resulted in two compromise agreements: a cease-fire and a final declaration. The cease-fire established a demilitarized zone at the 17th parallel in Vietnam. The final declaration provided for elections to unify Vietnam under the supervision of an international commission. The United States refused to approve the final declaration.

- Which policy guided U.S. opposition to this declaration?
- A Containment**
 - B Peaceful coexistence
 - C Constructive engagement
 - D Deterrence

Differences in Maritime Shipping Distances Before and After the Panama Canal Opened



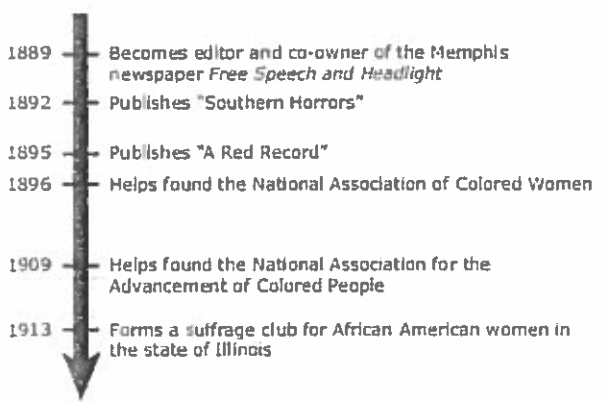
- What was the main effect of the changes shown in this graph on the western United States?
- A Immigration from Europe to western U.S. cities increased rapidly.
 - B Western U.S. businesses traded more efficiently with the East Coast and Europe.**
 - C Asian businesses bypassed the West Coast to trade directly with the East Coast.
 - D Western states recruited guest workers from the Caribbean and South America.

Civil Rights Organizations

Important Leader	Martin Luther King, Jr.	Huey P. Newton
Name of Organization	Southern Christian Leadership Conference	_____ ? _____
Basic Philosophy	Use nonviolent resistance to eliminate racial segregation and discrimination	Use all necessary means to defend the community and provide for community needs

- Which organization's name correctly completes this table?
- A Nation of Islam
 - B Black Panther Party**
 - C Congress of Racial Equality
 - D NAACP

Achievements of Ida B. Wells



- These achievements illustrate Ida B. Wells's contributions as —
- A a religious leader
 - B an artist of the Harlem Renaissance
 - C a supporter of Prohibition
 - D an advocate of equality**

Great Society Programs

Head Start	Provide early childhood education
Job Corps	Improve employment opportunities for young people
HUD	1
Medicare	2

- Which pair of goals best completes this table?
- A 1: Ensure the availability of affordable housing
2: Provide health insurance for senior citizens**
 - B 1: Increase turnout of minority voters
2: Increase federal funds for public universities
 - C 1: Create an urban renewal movement
2: Increase the number of volunteers for community projects
 - D 1: Enforce equal access to public education
2: Provide programs to assist with food purchases