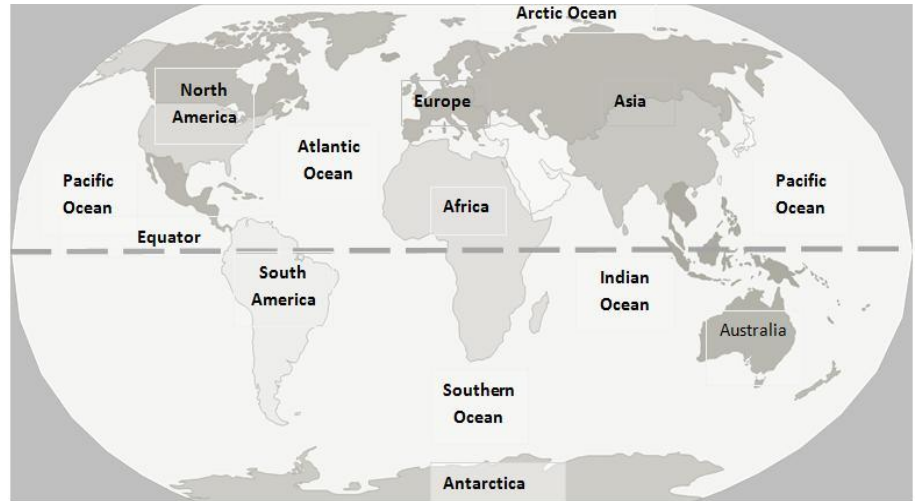


## Maps and Globes Study Guide

What is a map? What is a globe? What is an atlas?

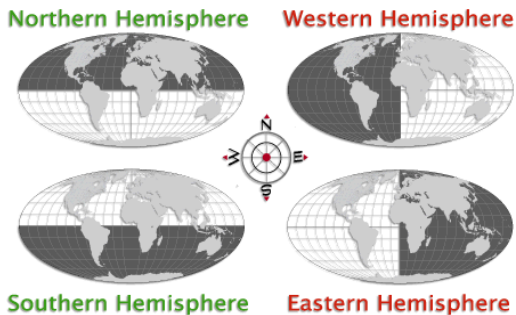
Locate the 7 continents.

- Africa
- Antarctica
- Asia
- Australia
- Europe
- North America
- South America



Locate the 5 oceans.

- Arctic Ocean
- Atlantic Ocean
- Indian Ocean
- Pacific Ocean
- Southern Ocean



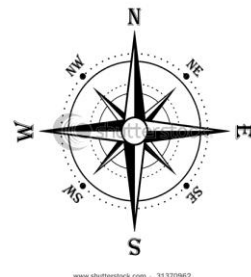
**Equator** –the imaginary line that divides the Earth into northern and southern hemispheres.

**Prime Meridian** – the imaginary line that divides the Earth into eastern and western hemispheres

Use a simple number-letter grid system (see page 2).

On what continent is England, Spain and France?

Use directions on a compass rose to describe location (cardinal and intermediate).



NAME: \_\_\_\_\_

# ★ Geography Grid ★

What are the coordinates of the stars on each continent?

Africa \_\_\_\_\_

Antarctica \_\_\_\_\_

Asia \_\_\_\_\_

North America \_\_\_\_\_

South America \_\_\_\_\_

Australia \_\_\_\_\_

Europe \_\_\_\_\_

